



**ALL SAINTS  
CATHOLIC SCHOOL**  
Growing Leaders in Mind, Body, and Spirit

Going into  
**Third Grade**  
Summer Coursework 2022  
*Math Skills*

Name: \_\_\_\_\_

Date: \_\_\_\_\_  
©2022TunstallandGrant

# Skills Check: Standard Form

Write the numbers in standard form.

Score: \_\_\_\_\_

one thousand,  
one hundred  
forty-two

five hundred  
twenty-eight

seven hundred  
thirty-five

eight hundred  
sixty-one

one thousand,  
three hundred  
eleven

four hundred  
eighty-three

three hundred  
twenty-two

two hundred  
fifty-four

one thousand,  
six hundred  
seventy-six

one thousand,  
six hundred  
ninety-three

five hundred  
eighteen

three hundred  
forty-two

Name: \_\_\_\_\_

Date: \_\_\_\_\_

©2022TunstallandGrant

# Skills Check: Base Ten

Show the hundreds, tens, and ones with a quick sketch.

Score: \_\_\_\_\_

154

230

351

465

186

642

503

278

495

307

154

261

Name: \_\_\_\_\_

Date: \_\_\_\_\_

©2022TunstallandGrant

# Skills Check: Place Value

Write the number in expanded form and base ten.

Score: \_\_\_\_\_

**538**

expanded form

\_\_\_ hundreds

\_\_\_ tens \_\_\_ ones

**125**

expanded form

\_\_\_ hundreds

\_\_\_ tens \_\_\_ ones

**342**

expanded form

\_\_\_ hundreds

\_\_\_ tens \_\_\_ ones

**457**

expanded form

\_\_\_ hundreds

\_\_\_ tens \_\_\_ ones

**219**

expanded form

\_\_\_ hundreds

\_\_\_ tens \_\_\_ ones

**684**

expanded form

\_\_\_ hundreds

\_\_\_ tens \_\_\_ ones

**790**

expanded form

\_\_\_ hundreds

\_\_\_ tens \_\_\_ ones

**965**

expanded form

\_\_\_ hundreds

\_\_\_ tens \_\_\_ ones

**876**

expanded form

\_\_\_ hundreds

\_\_\_ tens \_\_\_ ones

**351**

expanded form

\_\_\_ hundreds

\_\_\_ tens \_\_\_ ones

**492**

expanded form

\_\_\_ hundreds

\_\_\_ tens \_\_\_ ones

**174**

expanded form

\_\_\_ hundreds

\_\_\_ tens \_\_\_ ones

Name: \_\_\_\_\_

Date: \_\_\_\_\_

©2022TunstallandGrant

# Skills Check: Comparing Numbers

Write in the comparison symbol:  $<$ ,  $>$ , or  $=$  for each box.

Score: \_\_\_\_\_

502	604	842	516	329	240	165	178
-----	-----	-----	-----	-----	-----	-----	-----

894	819	387	385	232	238	393	375
-----	-----	-----	-----	-----	-----	-----	-----

505	504	419	391	251	215	627	578
-----	-----	-----	-----	-----	-----	-----	-----

377	372	135	152	234	243	556	565
-----	-----	-----	-----	-----	-----	-----	-----

135	182	265	256	878	800	212	200
-----	-----	-----	-----	-----	-----	-----	-----

327	344	519	534	615	640	349	436
-----	-----	-----	-----	-----	-----	-----	-----

752	479	228	326	947	944	516	517
-----	-----	-----	-----	-----	-----	-----	-----

251	250	890	980	351	315	875	780
-----	-----	-----	-----	-----	-----	-----	-----

794	840	135	351	275	274	256	356
-----	-----	-----	-----	-----	-----	-----	-----

605	607	810	808	903	903	109	900
-----	-----	-----	-----	-----	-----	-----	-----

Name: \_\_\_\_\_

Date: \_\_\_\_\_  
©2022TunstallandGrant

# Skills Check: Order Numbers

Order the numbers in each box from least to greatest.

Score: \_\_\_\_\_

103 123 201

425 124 420

218 118 182

\_\_\_\_\_, \_\_\_\_\_, \_\_\_\_\_

\_\_\_\_\_, \_\_\_\_\_, \_\_\_\_\_

\_\_\_\_\_, \_\_\_\_\_, \_\_\_\_\_

101 111 110

653 356 533

520 515 905

\_\_\_\_\_, \_\_\_\_\_, \_\_\_\_\_

\_\_\_\_\_, \_\_\_\_\_, \_\_\_\_\_

\_\_\_\_\_, \_\_\_\_\_, \_\_\_\_\_

930 603 320

275 427 254

109 919 909

\_\_\_\_\_, \_\_\_\_\_, \_\_\_\_\_

\_\_\_\_\_, \_\_\_\_\_, \_\_\_\_\_

\_\_\_\_\_, \_\_\_\_\_, \_\_\_\_\_

626 621 126

539 530 535

406 104 404

\_\_\_\_\_, \_\_\_\_\_, \_\_\_\_\_

\_\_\_\_\_, \_\_\_\_\_, \_\_\_\_\_

\_\_\_\_\_, \_\_\_\_\_, \_\_\_\_\_

Name: \_\_\_\_\_

Date: \_\_\_\_\_

©2022TunstallandGrant

# Skills Check: Ten More Ten Less

Fill in the numbers that are ten less and ten more than the given numbers. Score: \_\_\_\_\_

\_\_\_ 325 \_\_\_

\_\_\_ 627 \_\_\_

\_\_\_ 231 \_\_\_

\_\_\_ 414 \_\_\_

\_\_\_ 289 \_\_\_

\_\_\_ 990 \_\_\_

\_\_\_ 525 \_\_\_

\_\_\_ 146 \_\_\_

\_\_\_ 416 \_\_\_

\_\_\_ 237 \_\_\_

\_\_\_ 953 \_\_\_

\_\_\_ 527 \_\_\_

\_\_\_ 772 \_\_\_

\_\_\_ 374 \_\_\_

\_\_\_ 112 \_\_\_

\_\_\_ 868 \_\_\_

\_\_\_ 468 \_\_\_

\_\_\_ 391 \_\_\_

\_\_\_ 103 \_\_\_

\_\_\_ 802 \_\_\_

\_\_\_ 259 \_\_\_

\_\_\_ 197 \_\_\_

\_\_\_ 534 \_\_\_

\_\_\_ 704 \_\_\_

Name: \_\_\_\_\_

Date: \_\_\_\_\_

©2022TunstallandGrant

# Skills Check: 100 More 100 Less

Fill in the numbers that are 100 less and 100 more than the given numbers. Score: \_\_\_\_\_

\_\_\_ 356 \_\_\_

\_\_\_ 562 \_\_\_

\_\_\_ 723 \_\_\_

\_\_\_ 715 \_\_\_

\_\_\_ 128 \_\_\_

\_\_\_ 299 \_\_\_

\_\_\_ 250 \_\_\_

\_\_\_ 314 \_\_\_

\_\_\_ 841 \_\_\_

\_\_\_ 844 \_\_\_

\_\_\_ 795 \_\_\_

\_\_\_ 652 \_\_\_

\_\_\_ 171 \_\_\_

\_\_\_ 437 \_\_\_

\_\_\_ 311 \_\_\_

\_\_\_ 485 \_\_\_

\_\_\_ 946 \_\_\_

\_\_\_ 539 \_\_\_

\_\_\_ 506 \_\_\_

\_\_\_ 680 \_\_\_

\_\_\_ 125 \_\_\_

\_\_\_ 159 \_\_\_

\_\_\_ 253 \_\_\_

\_\_\_ 970 \_\_\_



Name: \_\_\_\_\_

Date: \_\_\_\_\_

©2022TunstallandGrant

# Skills Check: Ten More Ten Less One More One Less

Complete the number puzzles.

Score: \_\_\_\_\_

	235	

	867	

	452	

	628	

	315	

	983	

	554	

	733	

	1,091	

	160	

	1,105	

	776	

Name: \_\_\_\_\_

Date: \_\_\_\_\_

©2022TunstallandGrant

# Skills Check: Count On

Count on and write the missing numbers in the series.

Score: \_\_\_\_\_

145, 146, \_\_\_\_\_, \_\_\_\_\_, \_\_\_\_\_, \_\_\_\_\_

624, 625, \_\_\_\_\_, \_\_\_\_\_, \_\_\_\_\_, \_\_\_\_\_

578, 579, \_\_\_\_\_, \_\_\_\_\_, \_\_\_\_\_, \_\_\_\_\_

720, 721, \_\_\_\_\_, \_\_\_\_\_, \_\_\_\_\_, \_\_\_\_\_

957, 958, \_\_\_\_\_, \_\_\_\_\_, \_\_\_\_\_, \_\_\_\_\_

202, 203, \_\_\_\_\_, \_\_\_\_\_, \_\_\_\_\_, \_\_\_\_\_

910, 911, \_\_\_\_\_, \_\_\_\_\_, \_\_\_\_\_, \_\_\_\_\_

637, 638, \_\_\_\_\_, \_\_\_\_\_, \_\_\_\_\_, \_\_\_\_\_

891, 892, \_\_\_\_\_, \_\_\_\_\_, \_\_\_\_\_, \_\_\_\_\_

1,105, 1,106, \_\_\_\_\_, \_\_\_\_\_, \_\_\_\_\_

Name: \_\_\_\_\_

Date: \_\_\_\_\_

©2022TunstallandGrant

# Skills Check: Count Back

Count back and write the missing numbers in the series. Score: \_\_\_\_\_

132, 131, \_\_\_\_\_, \_\_\_\_\_, \_\_\_\_\_, \_\_\_\_\_

526, 525, \_\_\_\_\_, \_\_\_\_\_, \_\_\_\_\_, \_\_\_\_\_

870, 869, \_\_\_\_\_, \_\_\_\_\_, \_\_\_\_\_, \_\_\_\_\_

725, 724, \_\_\_\_\_, \_\_\_\_\_, \_\_\_\_\_, \_\_\_\_\_

959, 958, \_\_\_\_\_, \_\_\_\_\_, \_\_\_\_\_, \_\_\_\_\_

604, 603, \_\_\_\_\_, \_\_\_\_\_, \_\_\_\_\_, \_\_\_\_\_

310, 309, \_\_\_\_\_, \_\_\_\_\_, \_\_\_\_\_, \_\_\_\_\_

433, 432, \_\_\_\_\_, \_\_\_\_\_, \_\_\_\_\_, \_\_\_\_\_

899, 898, \_\_\_\_\_, \_\_\_\_\_, \_\_\_\_\_, \_\_\_\_\_

1,056, 1,054, \_\_\_\_\_, \_\_\_\_\_, \_\_\_\_\_

Name: \_\_\_\_\_

Date: \_\_\_\_\_

©2022TunstallandGrant

# Skills Check: Even or Odd

Circle the word even or odd for the number in the box. Score: \_\_\_\_\_

**354**

even odd

**566**

even odd

**725**

even odd

**710**

even odd

**122**

even odd

**290**

even odd

**257**

even odd

**319**

even odd

**846**

even odd

**842**

even odd

**791**

even odd

**658**

even odd

**179**

even odd

**433**

even odd

**313**

even odd

**485**

even odd

**946**

even odd

**539**

even odd

**506**

even odd

**680**

even odd

**125**

even odd

**159**

even odd

**253**

even odd

**970**

even odd

Name: \_\_\_\_\_

Date: \_\_\_\_\_

©2022TunstallandGrant

# Skills Check: Add to 20

Add to find the sum.

Score: \_\_\_\_\_

$3 + 9 =$

$9 + 8 =$

$6 + 5 =$

$8 + 5 =$

$2 + 13 =$

$10 + 8 =$

$3 + 15 =$

$8 + 6 =$

$2 + 16 =$

$6 + 13 =$

$6 + 14 =$

$11 + 4 =$

$4 + 12 =$

$7 + 7 =$

$5 + 13 =$

$11 + 9 =$

$10 + 5 =$

$4 + 15 =$

Name: \_\_\_\_\_

Date: \_\_\_\_\_

©2022TunstallandGrant

# Skills Check: Subtract Within 20

Subtract to find the sum.

Score: \_\_\_\_\_

$15 - 9 =$

$16 - 4 =$

$18 - 3 =$

$14 - 5 =$

$17 - 6 =$

$13 - 8 =$

$19 - 11 =$

$18 - 6 =$

$12 - 9 =$

$15 - 2 =$

$16 - 8 =$

$11 - 6 =$

$14 - 9 =$

$17 - 5 =$

$15 - 7 =$

$11 - 4 =$

$20 - 12 =$

$13 - 3 =$

Name: \_\_\_\_\_

Date: \_\_\_\_\_

©2022TunstallandGrant

# Skills Check: Subtract Within 20

Subtract to find the difference.

Score: \_\_\_\_\_

$13 - 9 =$

$19 - 8 =$

$16 - 5 =$

$18 - 5 =$

$12 - 6 =$

$11 - 8 =$

$17 - 5 =$

$18 - 6 =$

$12 - 5 =$

$19 - 3 =$

$16 - 4 =$

$11 - 4 =$

$14 - 8 =$

$17 - 7 =$

$15 - 6 =$

$11 - 9 =$

$16 - 5 =$

$14 - 6 =$

Name: \_\_\_\_\_

Date: \_\_\_\_\_

©2022TunstallandGrant

# Skills Check: Add a Ten

Add to find the sum.

Score: \_\_\_\_\_

$53 + 10 =$

$10 + 28 =$

$56 + 10 =$

$10 + 5 =$

$10 + 73 =$

$10 + 28 =$

$45 + 10 =$

$10 + 64 =$

$10 + 37 =$

$90 + 10 =$

$10 + 76 =$

$28 + 10 =$

$10 + 22 =$

$97 + 10 =$

$55 + 10 =$

$10 + 91 =$

$10 + 15 =$

$24 + 10 =$



Name: \_\_\_\_\_

Date: \_\_\_\_\_

©2022TunstallandGrant

# Skills Check: Double-Digit Addition

Add to find the sum.

Score: \_\_\_\_\_

$$\begin{array}{r} 18 \\ + 10 \\ \hline \end{array}$$

$$\begin{array}{r} 72 \\ + 11 \\ \hline \end{array}$$

$$\begin{array}{r} 16 \\ + 32 \\ \hline \end{array}$$

$$\begin{array}{r} 54 \\ + 25 \\ \hline \end{array}$$

$$\begin{array}{r} 36 \\ + 43 \\ \hline \end{array}$$

$$\begin{array}{r} 50 \\ + 36 \\ \hline \end{array}$$

$$\begin{array}{r} 16 \\ + 32 \\ \hline \end{array}$$

$$\begin{array}{r} 35 \\ + 32 \\ \hline \end{array}$$

$$\begin{array}{r} 28 \\ + 31 \\ \hline \end{array}$$

$$\begin{array}{r} 55 \\ + 40 \\ \hline \end{array}$$

$$\begin{array}{r} 32 \\ + 40 \\ \hline \end{array}$$

$$\begin{array}{r} 51 \\ + 23 \\ \hline \end{array}$$

$$\begin{array}{r} 23 \\ + 13 \\ \hline \end{array}$$

$$\begin{array}{r} 45 \\ + 23 \\ \hline \end{array}$$

$$\begin{array}{r} 15 \\ + 24 \\ \hline \end{array}$$

Name: \_\_\_\_\_

Date: \_\_\_\_\_

©2022TunstallandGrant

# Skills Check: Double-Digit Addition

Add and regroup to find the sum.

Score: \_\_\_\_\_

$$\begin{array}{r} 45 \\ + 27 \\ \hline \end{array}$$

$$\begin{array}{r} 34 \\ + 86 \\ \hline \end{array}$$

$$\begin{array}{r} 46 \\ + 57 \\ \hline \end{array}$$

$$\begin{array}{r} 53 \\ + 29 \\ \hline \end{array}$$

$$\begin{array}{r} 17 \\ + 45 \\ \hline \end{array}$$

$$\begin{array}{r} 57 \\ + 63 \\ \hline \end{array}$$

$$\begin{array}{r} 99 \\ + 12 \\ \hline \end{array}$$

$$\begin{array}{r} 85 \\ + 16 \\ \hline \end{array}$$

$$\begin{array}{r} 35 \\ + 35 \\ \hline \end{array}$$

$$\begin{array}{r} 64 \\ + 46 \\ \hline \end{array}$$

$$\begin{array}{r} 28 \\ + 68 \\ \hline \end{array}$$

$$\begin{array}{r} 21 \\ + 59 \\ \hline \end{array}$$

$$\begin{array}{r} 37 \\ + 26 \\ \hline \end{array}$$

$$\begin{array}{r} 53 \\ + 48 \\ \hline \end{array}$$

$$\begin{array}{r} 22 \\ + 79 \\ \hline \end{array}$$

Name: \_\_\_\_\_

Date: \_\_\_\_\_

©2022TunstallandGrant

# Skills Check: Double-Digit Subtraction

Subtract to find the difference.

Score: \_\_\_\_\_

$$\begin{array}{r} 28 \\ - 10 \\ \hline \end{array}$$

$$\begin{array}{r} 52 \\ - 11 \\ \hline \end{array}$$

$$\begin{array}{r} 32 \\ - 11 \\ \hline \end{array}$$

$$\begin{array}{r} 56 \\ - 25 \\ \hline \end{array}$$

$$\begin{array}{r} 43 \\ - 31 \\ \hline \end{array}$$

$$\begin{array}{r} 48 \\ - 30 \\ \hline \end{array}$$

$$\begin{array}{r} 46 \\ - 16 \\ \hline \end{array}$$

$$\begin{array}{r} 35 \\ - 32 \\ \hline \end{array}$$

$$\begin{array}{r} 88 \\ - 56 \\ \hline \end{array}$$

$$\begin{array}{r} 55 \\ - 40 \\ \hline \end{array}$$

$$\begin{array}{r} 42 \\ - 31 \\ \hline \end{array}$$

$$\begin{array}{r} 53 \\ - 23 \\ \hline \end{array}$$

$$\begin{array}{r} 23 \\ - 13 \\ \hline \end{array}$$

$$\begin{array}{r} 45 \\ - 23 \\ \hline \end{array}$$

$$\begin{array}{r} 36 \\ - 24 \\ \hline \end{array}$$

Name: \_\_\_\_\_

Date: \_\_\_\_\_

©2022TunstallandGrant

# Skills Check: Double-Digit Subtraction

Subtract to find the difference. Regroup.

Score: \_\_\_\_\_

$$\begin{array}{r} 45 \\ - 27 \\ \hline \end{array}$$

$$\begin{array}{r} 94 \\ - 86 \\ \hline \end{array}$$

$$\begin{array}{r} 76 \\ - 57 \\ \hline \end{array}$$

$$\begin{array}{r} 53 \\ - 29 \\ \hline \end{array}$$

$$\begin{array}{r} 53 \\ - 45 \\ \hline \end{array}$$

$$\begin{array}{r} 72 \\ - 63 \\ \hline \end{array}$$

$$\begin{array}{r} 90 \\ - 12 \\ \hline \end{array}$$

$$\begin{array}{r} 85 \\ - 46 \\ \hline \end{array}$$

$$\begin{array}{r} 34 \\ - 15 \\ \hline \end{array}$$

$$\begin{array}{r} 64 \\ - 46 \\ \hline \end{array}$$

$$\begin{array}{r} 67 \\ - 58 \\ \hline \end{array}$$

$$\begin{array}{r} 71 \\ - 59 \\ \hline \end{array}$$

$$\begin{array}{r} 32 \\ - 16 \\ \hline \end{array}$$

$$\begin{array}{r} 53 \\ - 28 \\ \hline \end{array}$$

$$\begin{array}{r} 82 \\ - 59 \\ \hline \end{array}$$

Name: \_\_\_\_\_

Date: \_\_\_\_\_

©2022TunstallandGrant

# Skills Check: Triple-Digit Addition

Add and regroup to find the sum.

Score: \_\_\_\_\_

$$\begin{array}{r} 245 \\ + 327 \\ \hline \end{array}$$

$$\begin{array}{r} 634 \\ + 186 \\ \hline \end{array}$$

$$\begin{array}{r} 746 \\ + 257 \\ \hline \end{array}$$

$$\begin{array}{r} 533 \\ + 269 \\ \hline \end{array}$$

$$\begin{array}{r} 147 \\ + 425 \\ \hline \end{array}$$

$$\begin{array}{r} 357 \\ + 263 \\ \hline \end{array}$$

$$\begin{array}{r} 199 \\ + 612 \\ \hline \end{array}$$

$$\begin{array}{r} 285 \\ + 416 \\ \hline \end{array}$$

$$\begin{array}{r} 535 \\ + 435 \\ \hline \end{array}$$

$$\begin{array}{r} 264 \\ + 346 \\ \hline \end{array}$$

$$\begin{array}{r} 328 \\ + 468 \\ \hline \end{array}$$

$$\begin{array}{r} 521 \\ + 359 \\ \hline \end{array}$$

$$\begin{array}{r} 237 \\ + 626 \\ \hline \end{array}$$

$$\begin{array}{r} 253 \\ + 448 \\ \hline \end{array}$$

$$\begin{array}{r} 422 \\ + 379 \\ \hline \end{array}$$

Name: \_\_\_\_\_

Date: \_\_\_\_\_

©2022TunstallandGrant

# Skills Check: Triple-Digit Subtraction

Subtract to find the difference.

Score: \_\_\_\_\_

$$\begin{array}{r} 445 \\ - 227 \\ \hline \end{array}$$

$$\begin{array}{r} 634 \\ - 486 \\ \hline \end{array}$$

$$\begin{array}{r} 546 \\ - 357 \\ \hline \end{array}$$

$$\begin{array}{r} 353 \\ - 169 \\ \hline \end{array}$$

$$\begin{array}{r} 647 \\ - 525 \\ \hline \end{array}$$

$$\begin{array}{r} 857 \\ - 463 \\ \hline \end{array}$$

$$\begin{array}{r} 799 \\ - 512 \\ \hline \end{array}$$

$$\begin{array}{r} 585 \\ - 316 \\ \hline \end{array}$$

$$\begin{array}{r} 535 \\ - 235 \\ \hline \end{array}$$

$$\begin{array}{r} 564 \\ - 246 \\ \hline \end{array}$$

$$\begin{array}{r} 828 \\ - 668 \\ \hline \end{array}$$

$$\begin{array}{r} 521 \\ - 459 \\ \hline \end{array}$$

$$\begin{array}{r} 937 \\ - 526 \\ \hline \end{array}$$

$$\begin{array}{r} 753 \\ - 648 \\ \hline \end{array}$$

$$\begin{array}{r} 622 \\ - 479 \\ \hline \end{array}$$

Name: \_\_\_\_\_


Date: \_\_\_\_\_

©2022TunstallandGrant


# Skills Check: Half Hour

Draw the hands on the analog clocks to match the digital time.


Score: \_\_\_\_\_




6:30




2:30




11:30




1:30




12:30




6:30




9:30




4:30




5:30



3:30



7:30



10:30

Name: \_\_\_\_\_




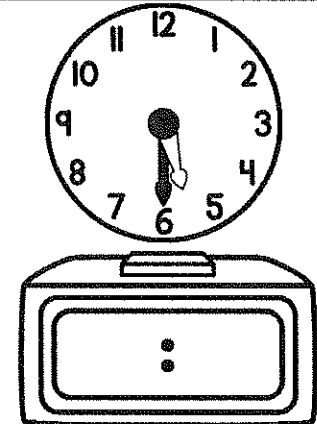
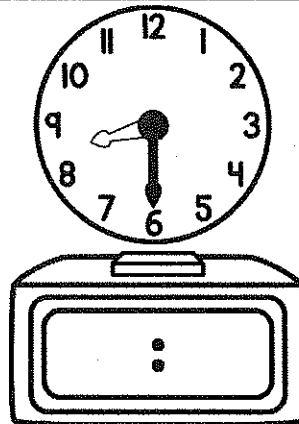


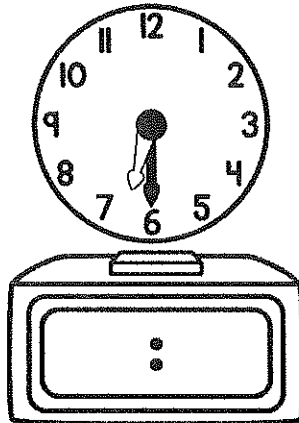
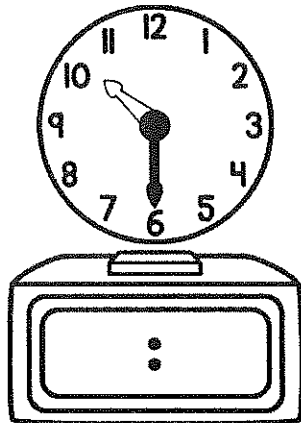

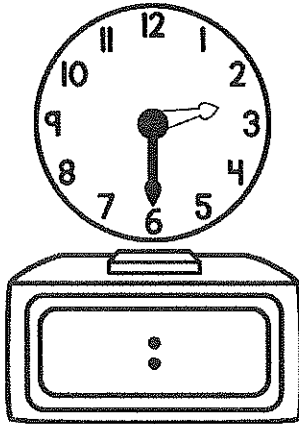
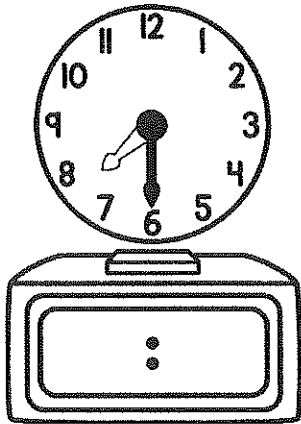
Date: \_\_\_\_\_

©2022TunstallandGrant

# Skills Check: Half Hour

Write the digital time to match the analog clocks.

Score: \_\_\_\_\_





Name: \_\_\_\_\_


Date: \_\_\_\_\_

©2022 Tunstall and Grant


# Skills Check: Quarter Hour

Draw the hands on the analog clocks to match the digital time.


Score: \_\_\_\_\_




1:15




3:45




5:15




12:45




4:15




7:45




11:45




6:15




2:45



8:15



9:45



10:15

Name: \_\_\_\_\_

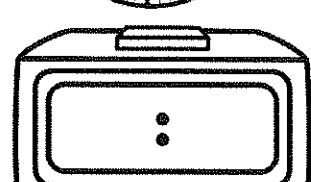

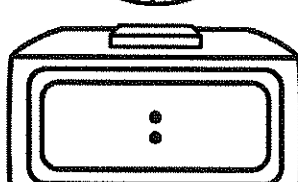
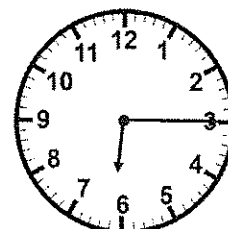

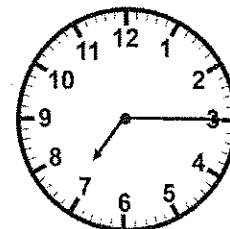
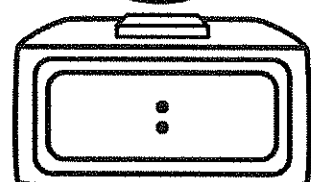
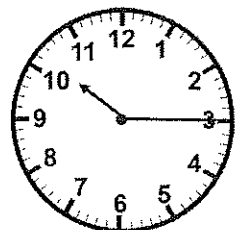
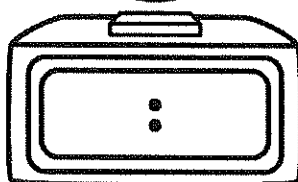
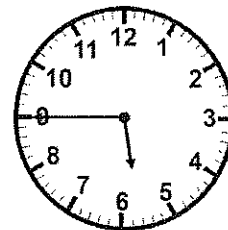
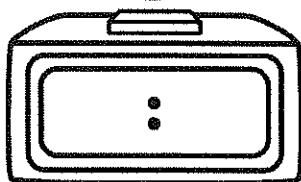
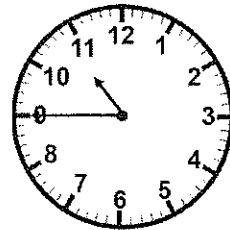
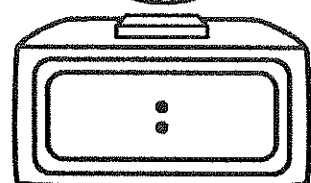
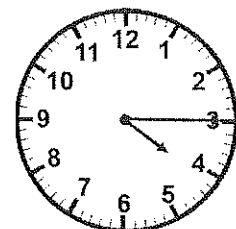
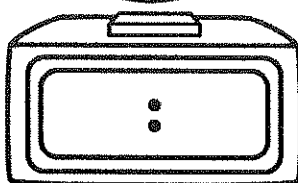
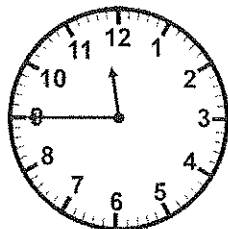
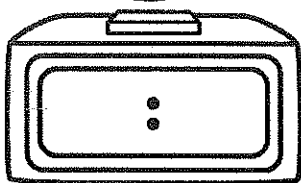
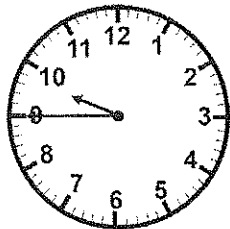
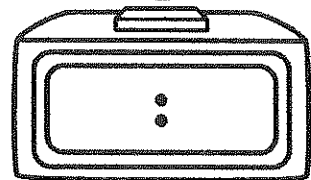
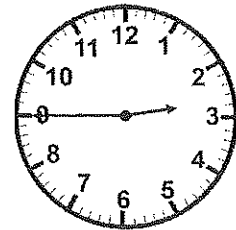
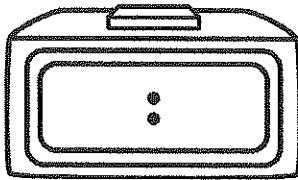

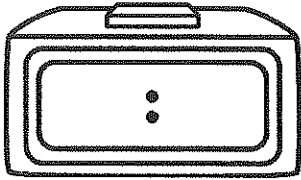

Date: \_\_\_\_\_

©2022TunstallandGrant

# Skills Check: Quarter Hour

Write the digital time to match the analog clocks.

Score: \_\_\_\_\_



Name: \_\_\_\_\_

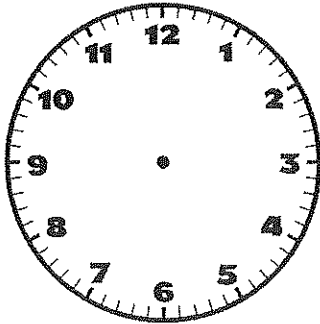
Date: \_\_\_\_\_

©2022TunstallandGrant

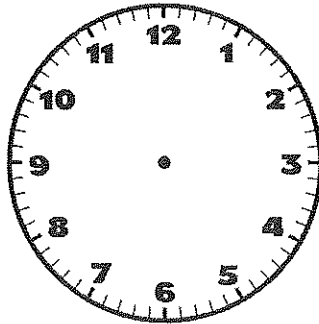
# Skills Check: To The Minute

Draw the hands on the analog clocks to match the digital time.

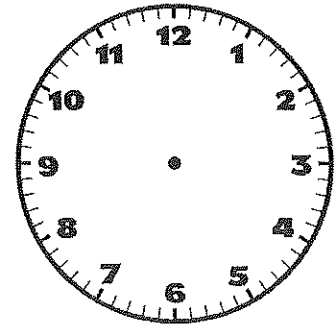
Score: \_\_\_\_\_



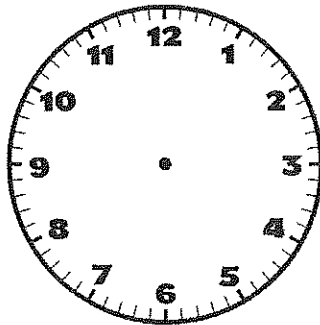
2:48



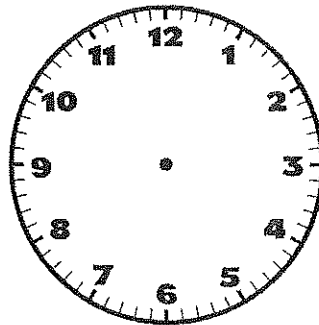
1:12



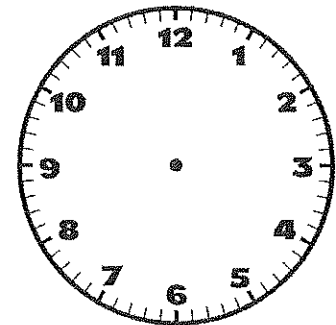
5:33



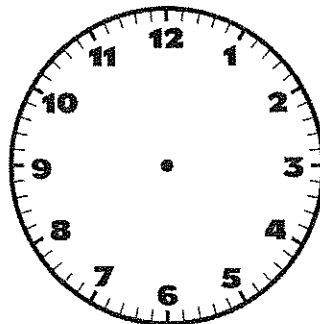
12:02



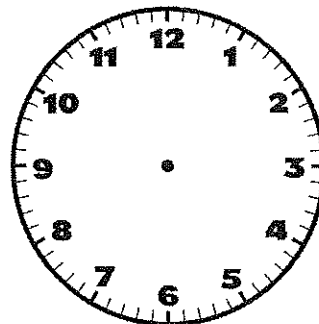
4:56



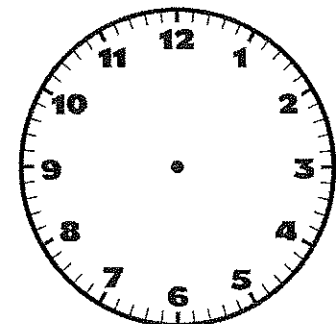
7:24



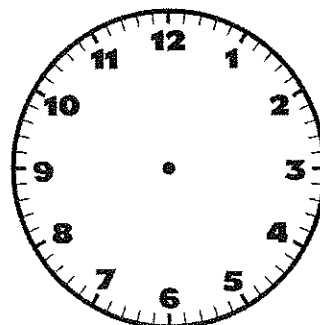
11:08



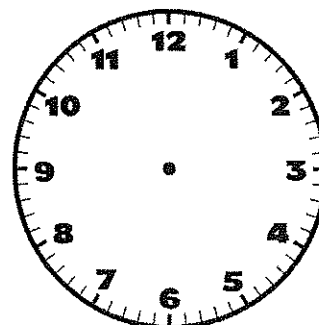
6:19



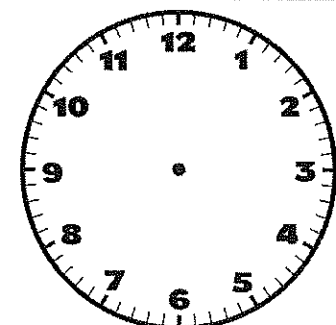
2:31



8:44



9:16



10:57

Name: \_\_\_\_\_

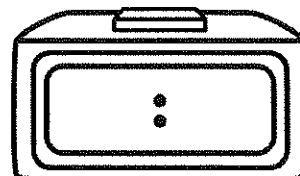
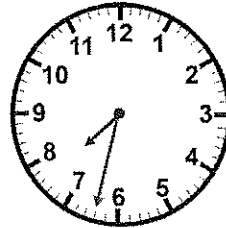
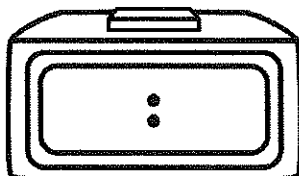
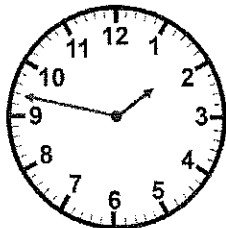
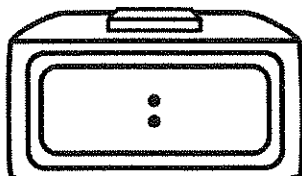
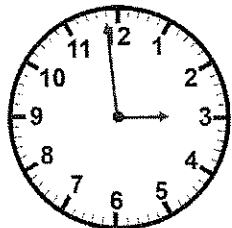
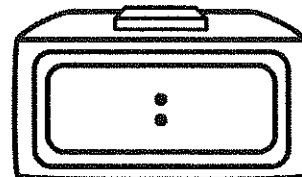

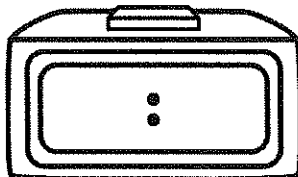
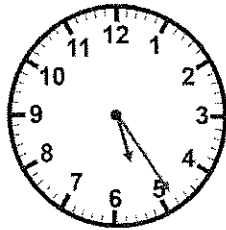
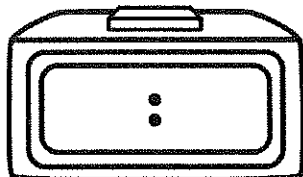
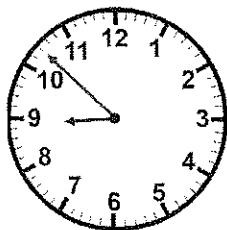
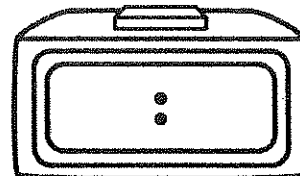

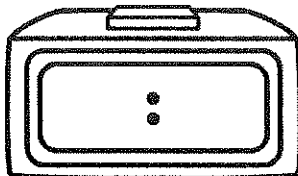

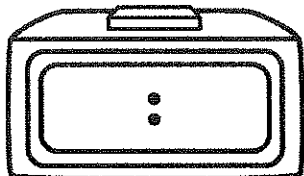
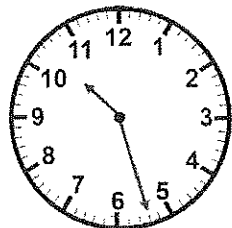
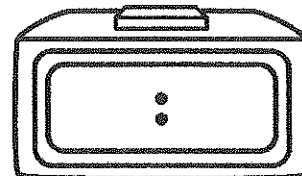
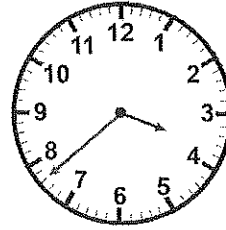
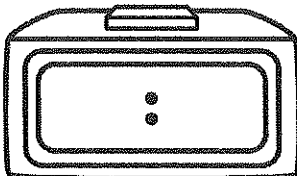
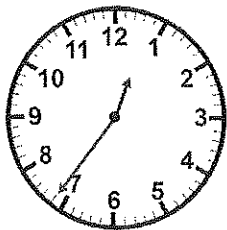
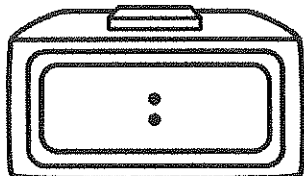
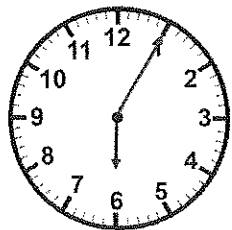
Date: \_\_\_\_\_

©2022TunstallandGrant

# Skills Check: To The Minute

Write the digital time to match the analog clocks.

Score: \_\_\_\_\_



Name: \_\_\_\_\_

Date: \_\_\_\_\_

©2022TunstallandGrant

# Skills Check: Count Coins

Count the amount.

Score: \_\_\_\_\_



\_\_\_\_\_ ¢



\_\_\_\_\_ ¢



\_\_\_\_\_ ¢




\_\_\_\_\_ ¢



\_\_\_\_\_ ¢



\_\_\_\_\_ ¢




\_\_\_\_\_ ¢




\_\_\_\_\_ ¢



\_\_\_\_\_ ¢



\_\_\_\_\_ ¢



\_\_\_\_\_ ¢



\_\_\_\_\_ ¢

Name: \_\_\_\_\_


Date: \_\_\_\_\_

©2022TunstallandGrant

# Skills Check: Money

Create a collection of coins that shows each value.

Score: \_\_\_\_\_



27¢

38¢

14¢

36¢

55¢

42¢

63¢

81¢

70¢

99¢

\$1.13

\$1.20

Name: \_\_\_\_\_


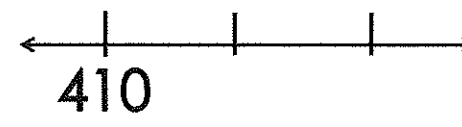
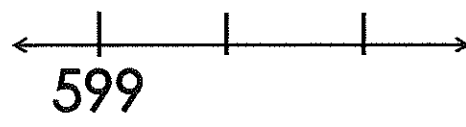
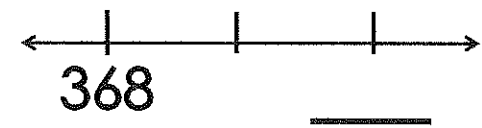
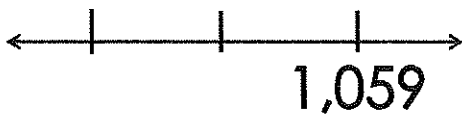
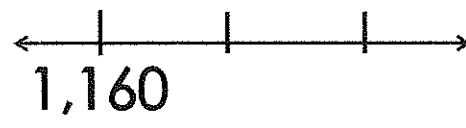
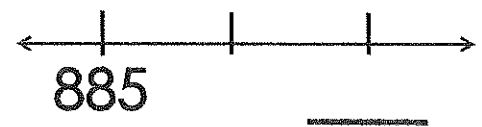
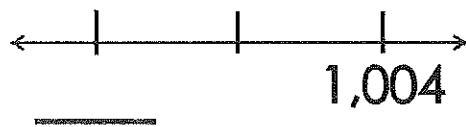
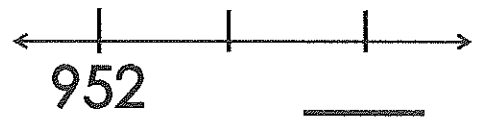
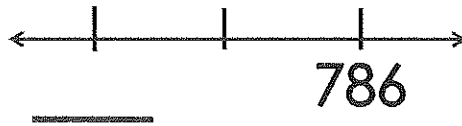

Date: \_\_\_\_\_

©2022TunstallandGrant

# Skills Check: Open Number Line

Finish the missing parts of the open number lines.

Score: \_\_\_\_\_



Name: \_\_\_\_\_


Date: \_\_\_\_\_  
©2022TunstallandGrant

# Skills Check: Partition Shapes


Partition the shapes to match the given terms.

Score: \_\_\_\_\_


halves



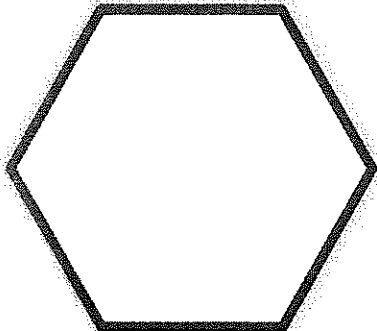
fourths




halves




quarters




eighths



halves



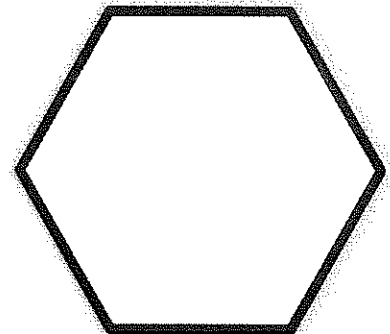
halves




quarters




halves




fourths



eighths



halves






Name: \_\_\_\_\_

Date: \_\_\_\_\_  
©2022TunstallandGrant

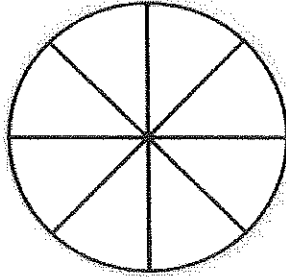
# Skills Check: Identify Parts

Circle or highlight the correct parts for each model.

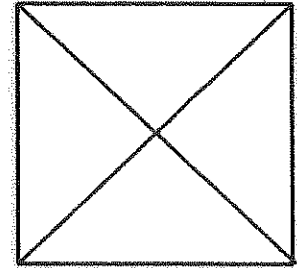
Score: \_\_\_\_\_



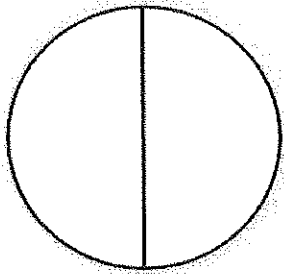
halves quarters eighths




halves fourths eighths



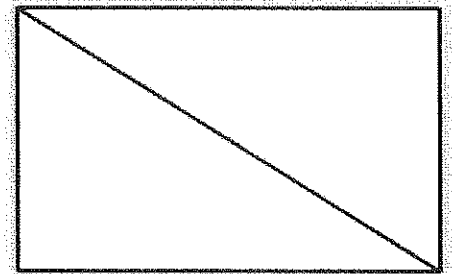
halves fourths eighths



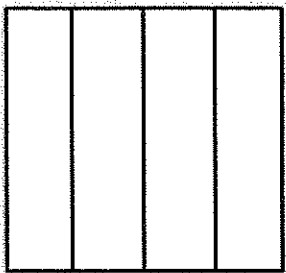
halves fourths eighths




halves quarters eighths



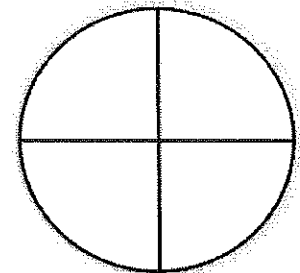
halves fourths eighths



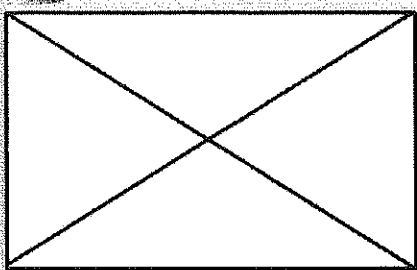
halves fourths eighths




halves fourths eighths




halves quarters eighths



halves fourths eighths



halves quarters eighths



halves fourths eighths

Name: \_\_\_\_\_

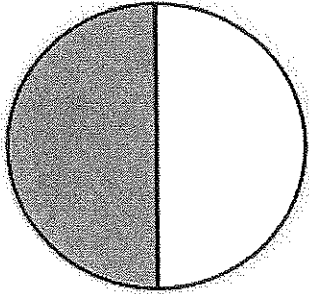
Date: \_\_\_\_\_

©2022TunstallandGrant


# Skills Check: Fractional Parts

Write a fraction to match the shaded fractional parts.

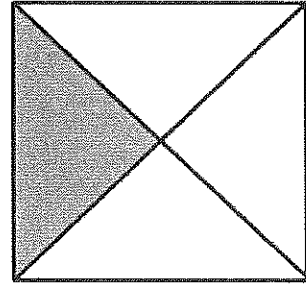
Score: \_\_\_\_\_




\_\_\_\_\_




\_\_\_\_\_



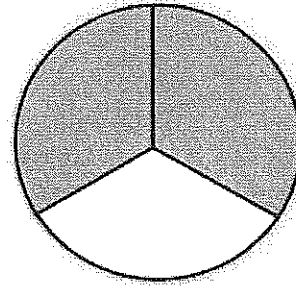
\_\_\_\_\_




\_\_\_\_\_



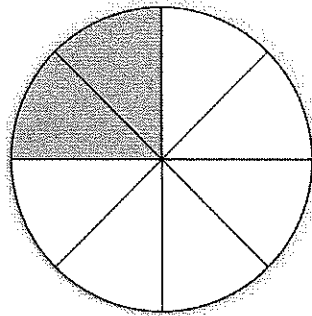
\_\_\_\_\_




\_\_\_\_\_



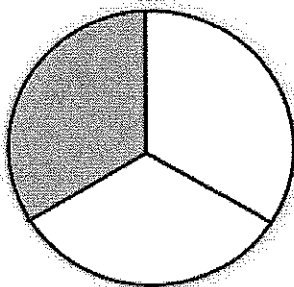
\_\_\_\_\_




\_\_\_\_\_



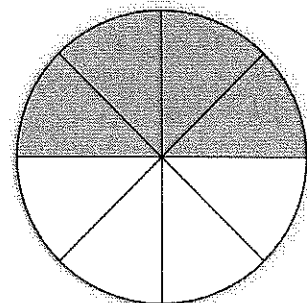
\_\_\_\_\_



\_\_\_\_\_



\_\_\_\_\_



\_\_\_\_\_

Name: \_\_\_\_\_

Date: \_\_\_\_\_


©2022TunstallandGrant

# Skills Check: 2D Attributes

Fill in the correct information for each 2D shape.

Score: \_\_\_\_\_

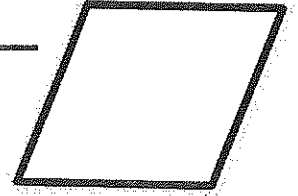
name \_\_\_\_\_



sides \_\_\_\_\_

vertices \_\_\_\_\_

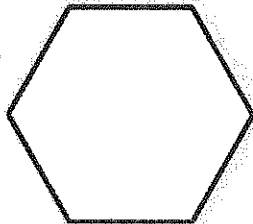
name \_\_\_\_\_



sides \_\_\_\_\_

vertices \_\_\_\_\_

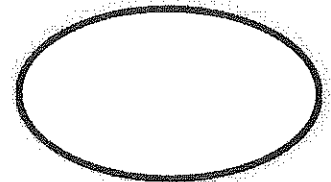
name \_\_\_\_\_



sides \_\_\_\_\_

vertices \_\_\_\_\_

name \_\_\_\_\_



sides \_\_\_\_\_

vertices \_\_\_\_\_

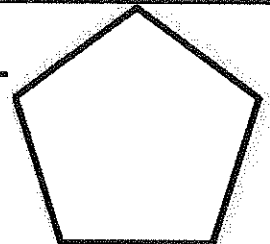
name \_\_\_\_\_



sides \_\_\_\_\_

vertices \_\_\_\_\_

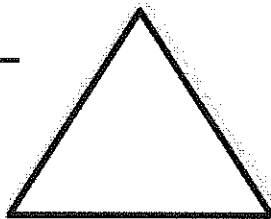
name \_\_\_\_\_



sides \_\_\_\_\_

vertices \_\_\_\_\_

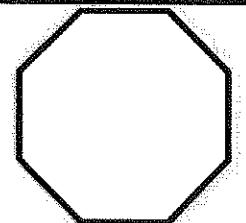
name \_\_\_\_\_



sides \_\_\_\_\_

vertices \_\_\_\_\_

name \_\_\_\_\_



sides \_\_\_\_\_

vertices \_\_\_\_\_

Name: \_\_\_\_\_

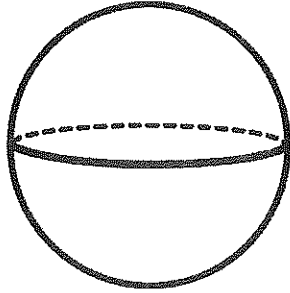
Date: \_\_\_\_\_  
©2022TunstallandGrant

# Skills Check: 3D Attributes

Fill in the correct information for each 3D figure.

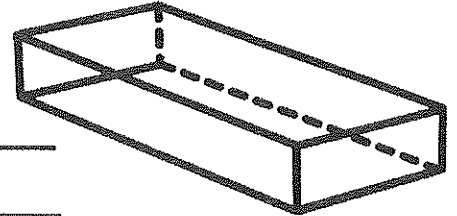
Score: \_\_\_\_\_

name \_\_\_\_\_



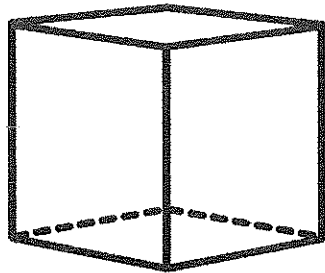
faces \_\_\_\_\_  
edges \_\_\_\_\_  
vertices \_\_\_\_\_

name \_\_\_\_\_



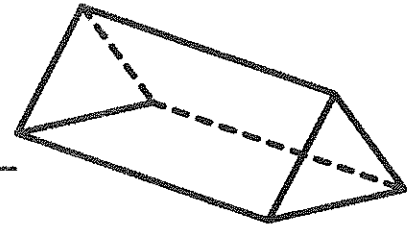
faces \_\_\_\_\_  
edges \_\_\_\_\_  
vertices \_\_\_\_\_

name \_\_\_\_\_



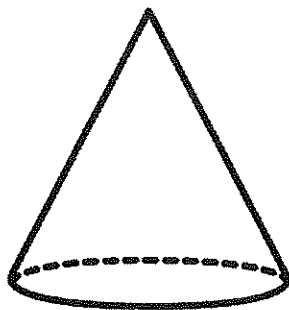
faces \_\_\_\_\_  
edges \_\_\_\_\_  
vertices \_\_\_\_\_

name \_\_\_\_\_



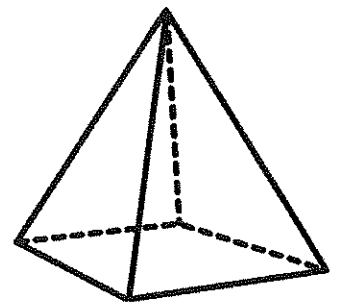
faces \_\_\_\_\_  
edges \_\_\_\_\_  
vertices \_\_\_\_\_

name \_\_\_\_\_




faces \_\_\_\_\_  
edges \_\_\_\_\_  
vertices \_\_\_\_\_

name \_\_\_\_\_



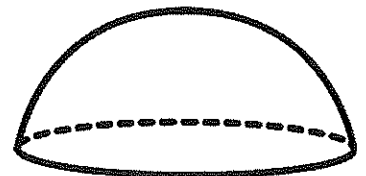
faces \_\_\_\_\_  
edges \_\_\_\_\_  
vertices \_\_\_\_\_

name \_\_\_\_\_



faces \_\_\_\_\_  
edges \_\_\_\_\_  
vertices \_\_\_\_\_

name \_\_\_\_\_



faces \_\_\_\_\_  
edges \_\_\_\_\_  
vertices \_\_\_\_\_

Name: \_\_\_\_\_

Date: \_\_\_\_\_  
©2022TunstallandGrant

# Skills Check: Types of Graphs

Label each graph with the correct name.

Score: \_\_\_\_\_

## WORD BANK

picture graph

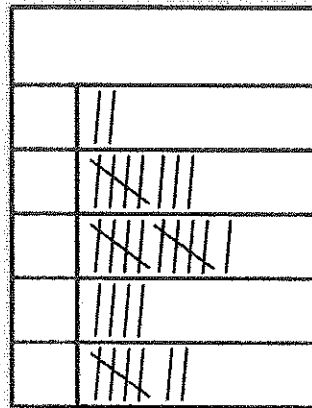
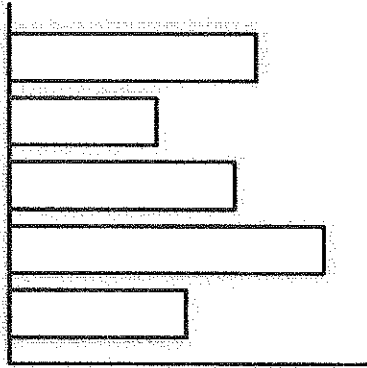
T- chart

frequency table

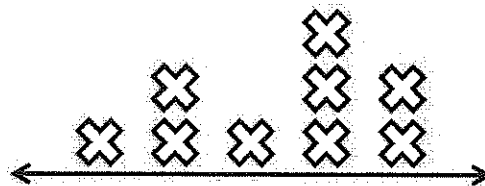

bar graph

tally chart

dot plot



this	that



Score	Frequency
6	2
7	3
8	7
9	7
10	1

Name: \_\_\_\_\_

Date: \_\_\_\_\_





















©2022TunstallandGrant

# Skills Check: Data From Graphs

Solve the problems involving the data from the graph.

Score: \_\_\_\_\_

## Ice Cream Scoops Sold on Sunday

chocolate							
vanilla							
strawberry							
mint							

Key: Each  equals 10 scoops

1. What kind sold the most?

\_\_\_\_\_

2. What kind sold the least?

\_\_\_\_\_

3. How many scoops of vanilla sold?

\_\_\_\_\_

4. How many fewer scoops of mint than chocolate sold?

\_\_\_\_\_

5. How many more scoops of strawberry than vanilla sold?

\_\_\_\_\_

6. How many scoops sold altogether?

\_\_\_\_\_

Name: \_\_\_\_\_

Date: \_\_\_\_\_

©2022TunstallandGrant

# Skills Check: Create A Graph

Study the chart. Make a pictograph and answer the questions. Score: \_\_\_\_\_

P.E. Ball Inventory			
balls	number		
yellow	16		
red	12		
green	10		
orange	8	Key: Each = 4 balls	

1. Which color of ball is there the most of?  
\_\_\_\_\_
2. How many yellow and orange are there?  
\_\_\_\_\_
3. How many red and green are there?  
\_\_\_\_\_
4. Which color of balls is there the least of?  
\_\_\_\_\_
5. How many more green than orange balls are there?  
\_\_\_\_\_
6. How many balls are there altogether?  
\_\_\_\_\_

Name: \_\_\_\_\_

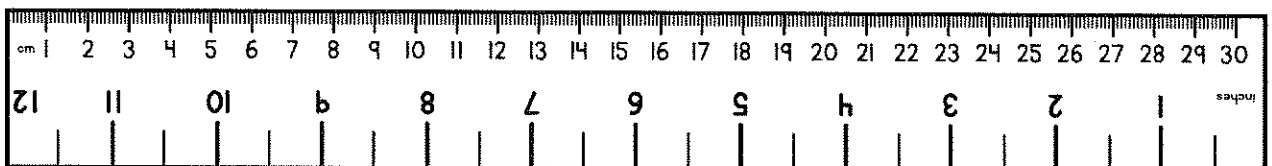
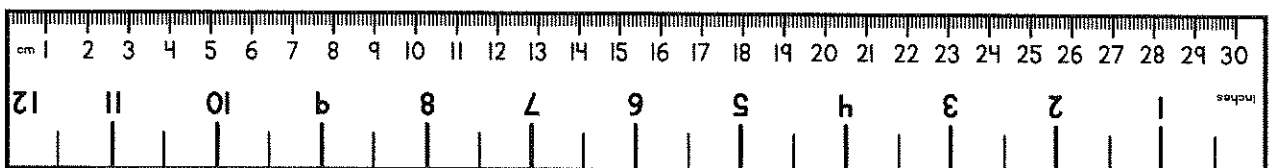
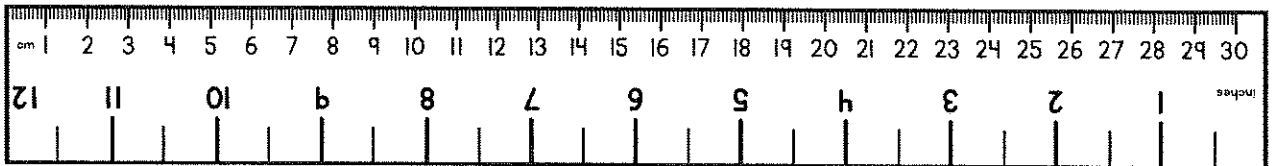
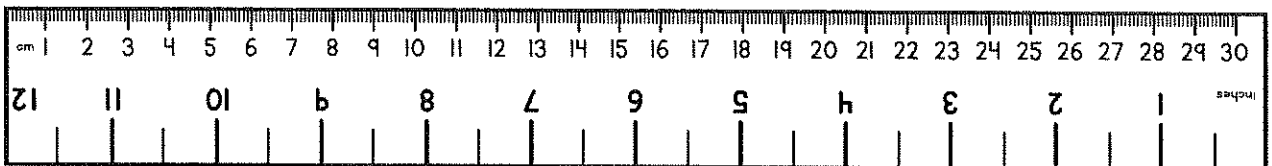
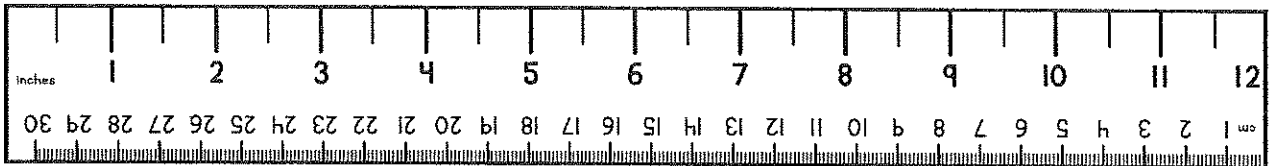
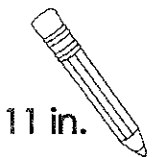
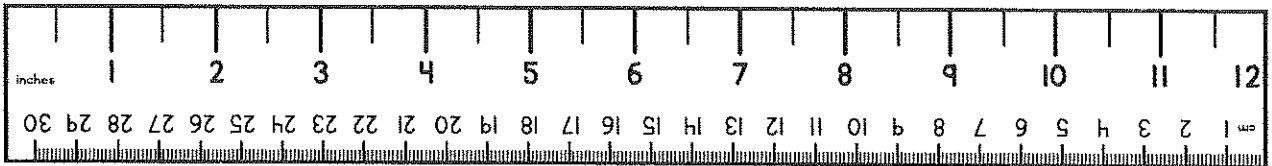
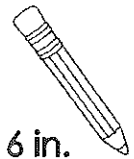
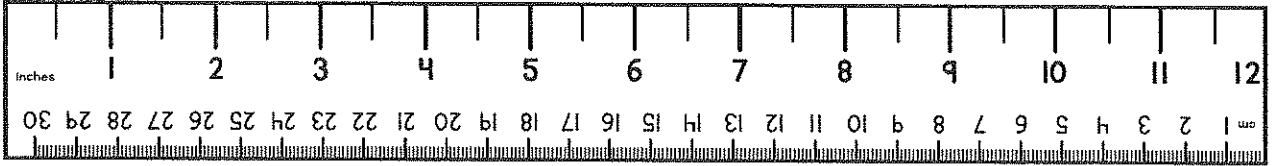
Date: \_\_\_\_\_

©2022TunstallandGrant

# Skills Check: Standard Measure

Draw a line to the length of the given inches or centimeters.

Score: \_\_\_\_\_






Name: \_\_\_\_\_

Date: \_\_\_\_\_  
©2022TunstallandGrant

# Skills Check: Inches and Centimeters

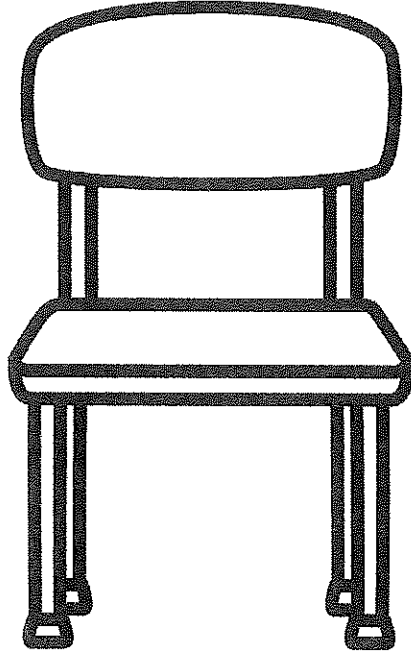
Measure each item to the nearest inch and centimeter.  
Record Results.

Score: \_\_\_\_\_



\_\_\_\_\_ inches

\_\_\_\_\_ centimeters



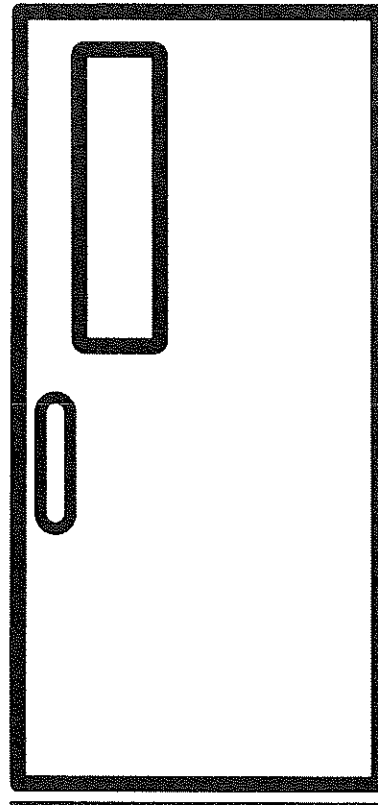
\_\_\_\_\_ inches

\_\_\_\_\_ centimeters



\_\_\_\_\_ inches

\_\_\_\_\_ centimeters



\_\_\_\_\_ inches

\_\_\_\_\_ centimeters

Name: \_\_\_\_\_




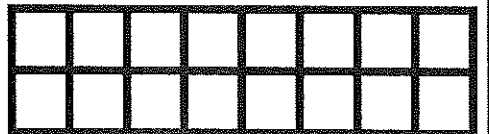







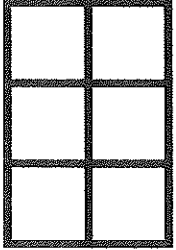
Date: \_\_\_\_\_

©2022TunstallandGrant

# Skills Check: Finding Area

Record the area of each item in square units.

Score: \_\_\_\_\_



Name: \_\_\_\_\_

Date: \_\_\_\_\_

©2022TunstallandGrant

# Skills Check: Word Problems

Write the equation for each word problem and solve.

Score: \_\_\_\_\_

There were 34 bees in the hive. 26 more bees came. How many total bees are in the hive?



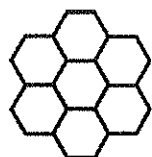
Vivie collected 51 jars of honey. She sold 15 jars at the market. How many jars does Vivie have left?



In the spring, 76 flowers were pollinated with the bees. In the summer, 42 more flowers were pollinated. How many total flowers were pollinated?



Leigh's bees made 65 honeycombs. Dee's bees made 23 fewer honeycombs. How many honeycombs did Dee's bees make?



Bee Town sells hives to new beekeepers. They sold 95 hives on Saturday and 87 hives on Sunday. How many more hives sold on Saturday?




Perry's Pollination Station has 24 queen bees. He sells half of them. How many queen bees are left?



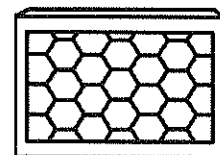
The first round of honey collection filled 39 jars. The second round of collection filled 27 jars. The final round filled 18 jars. What is the total number of honey jars collected?



There are 254 beekeepers in the state of Texas. There are 208 beekeepers in Ohio. What is the total for both states?



517 bees are found in a large beehive. If 328 bees are collected, how many bees will be left in the beehive?



Name: \_\_\_\_\_

Date: \_\_\_\_\_

©2022TunstallandGrant

# Skills Check: Financial Terms

Label each scenario with the correct financial term.

Score: \_\_\_\_\_

## WORD BANK

spending

withdrawal

consumer

saving

deposit

producer

budget

goods

service

A person who buys goods or services.

To put money into a bank account.

To use money to pay for something.

Someone who offers services or makes/grows goods.

To give food, money, or items to help a person or group of people.

Work that someone does for someone else in exchange for money.

Keeping some of your earnings to spend it later.

A plan for using money.

To take money out of a bank account.

Name: \_\_\_\_\_

Date: \_\_\_\_\_

©2022TunstallandGrant

# Skills Check: Make An Array

Make an array in each box to match. Write the product. Score: \_\_\_\_\_

$2 \times 2$

$4 \times 4$

$4 \times 2$

$5 \times 3$

$3 \times 6$

$3 \times 2$

$4 \times 3$

$2 \times 6$

$5 \times 4$

$5 \times 5$

$2 \times 7$

$3 \times 3$

Name: \_\_\_\_\_

Date: \_\_\_\_\_  
©2022TunstallandGrant

# Skills Check: Arrays

Study the array and write the equation and product.

Score: \_\_\_\_\_

